

1. World Continents and Oceans

**Objective:** Students will be able to identify and label each of the world continents and oceans when provided a blank map of the world.

*Continents:* Africa, Antarctica, Asia, Australia, Europe, North America, South America

*Oceans:* Arctic, Atlantic, Indian, Pacific, Southern

**The Physical World**  
Continents and Oceans

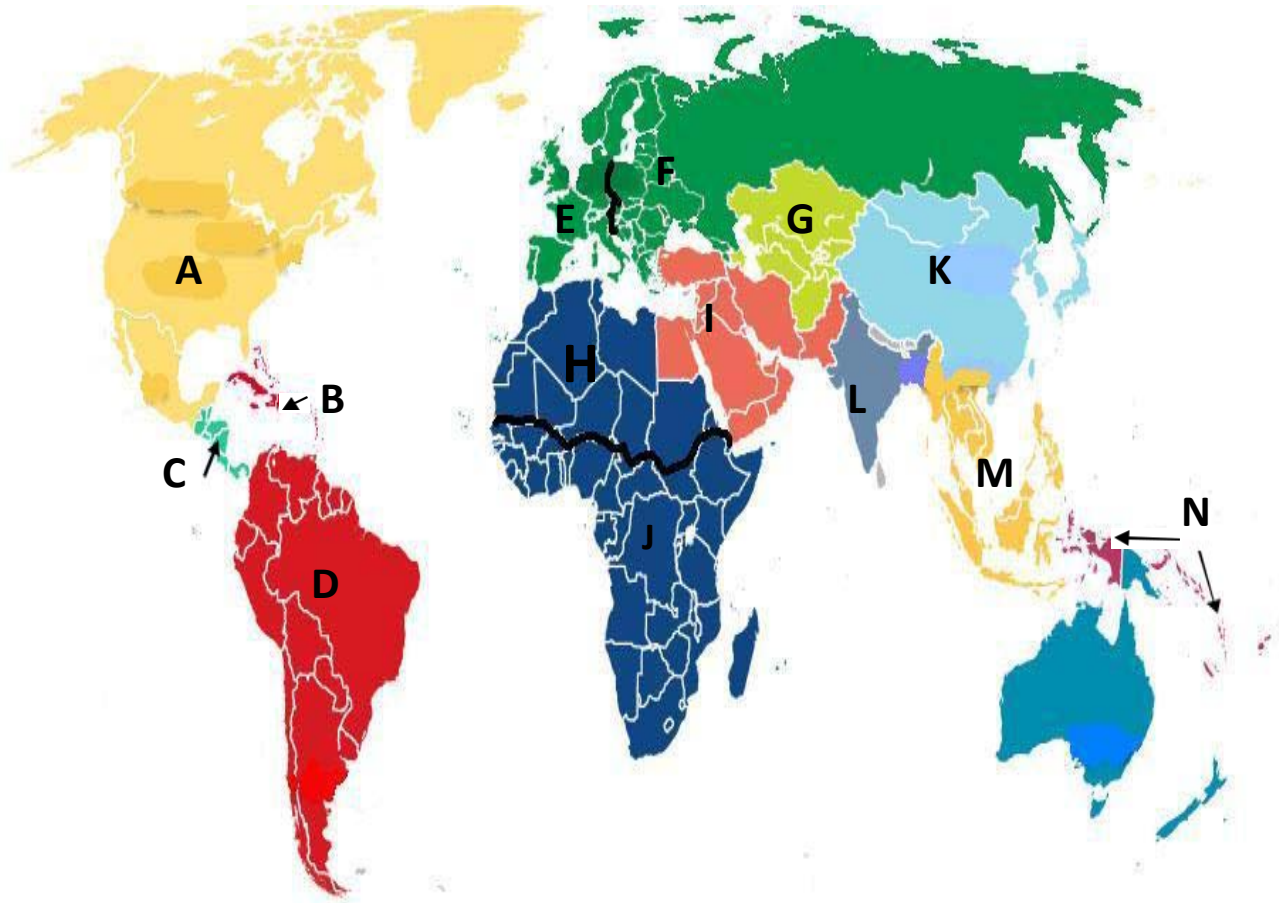
Provided by: [graphicmaps.com](http://graphicmaps.com)

Name the Continents			Name the Oceans	
1	4	6	8	11
2	5	7	9	12
3			10	

2. Regions of the World

**Objective:** Students will be able to identify and label each of the major regions of the world when provided a blank map of the world.

*Regions:* Identify each of the following regions: Caribbean, Central America, Central Asia, East Asia, Eastern Europe, Middle East (aka Southwest Asia), North Africa, North America, Australia/Oceania, South America (aka Latin America), South Asia, Southeast Asia, Sub-Saharan Africa, Western Europe



A. \_\_\_\_\_

B. \_\_\_\_\_

C. \_\_\_\_\_

D. \_\_\_\_\_

E. \_\_\_\_\_

F. \_\_\_\_\_

G. \_\_\_\_\_

H. \_\_\_\_\_

I. \_\_\_\_\_

J. \_\_\_\_\_

K. \_\_\_\_\_

L. \_\_\_\_\_

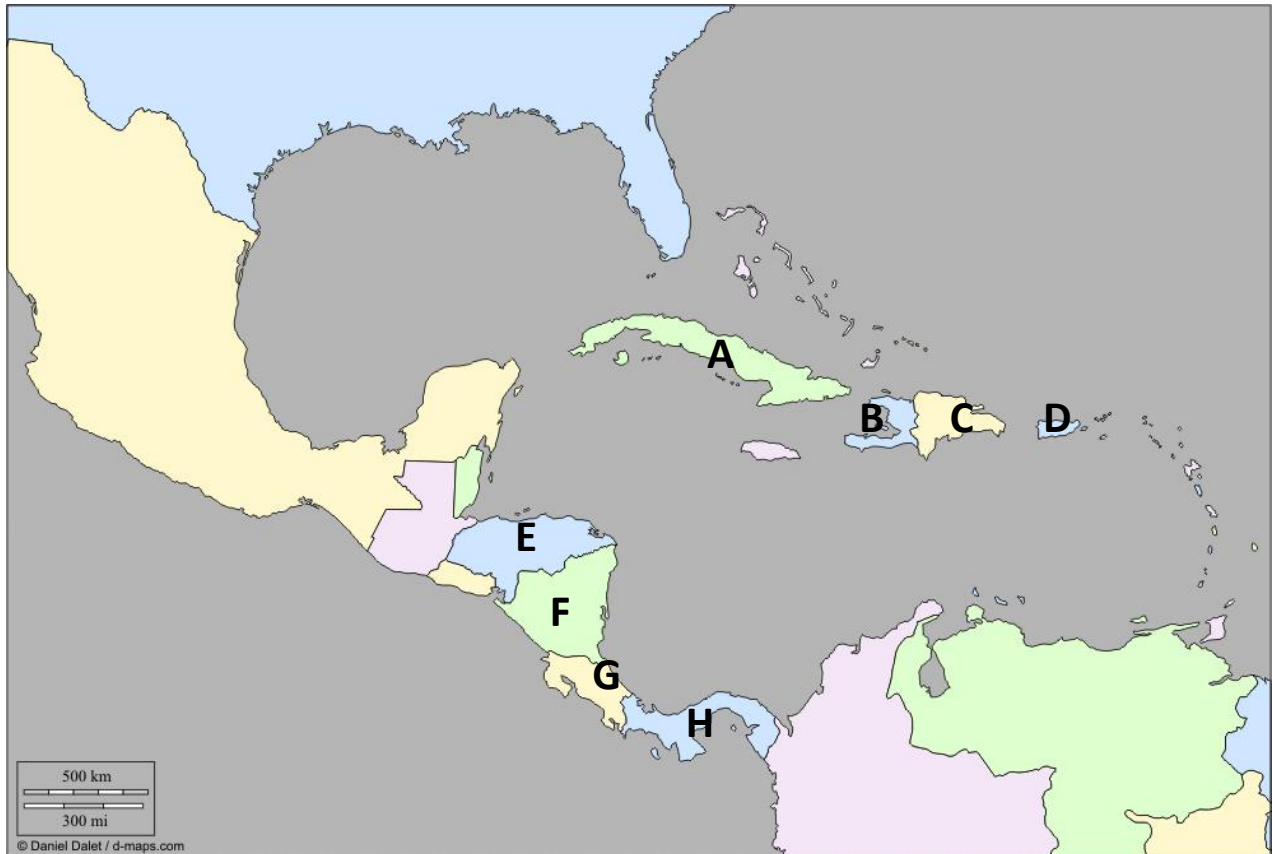
M. \_\_\_\_\_

N. \_\_\_\_\_

**3. Countries of the Central American and Caribbean Regions**

**Objective:** Students will be able to identify and label a selection of countries found within each of the major regions of the world when provided a blank map of the world.

*Countries:* Identify each of the following: Costa Rica, Cuba, Dominican Republic, Haiti, Honduras, Nicaragua, Panama, Puerto Rico\*



\*Puerto Rico is a commonwealth of the United States

A. \_\_\_\_\_

B. \_\_\_\_\_

C. \_\_\_\_\_

D. \_\_\_\_\_

E. \_\_\_\_\_

F. \_\_\_\_\_

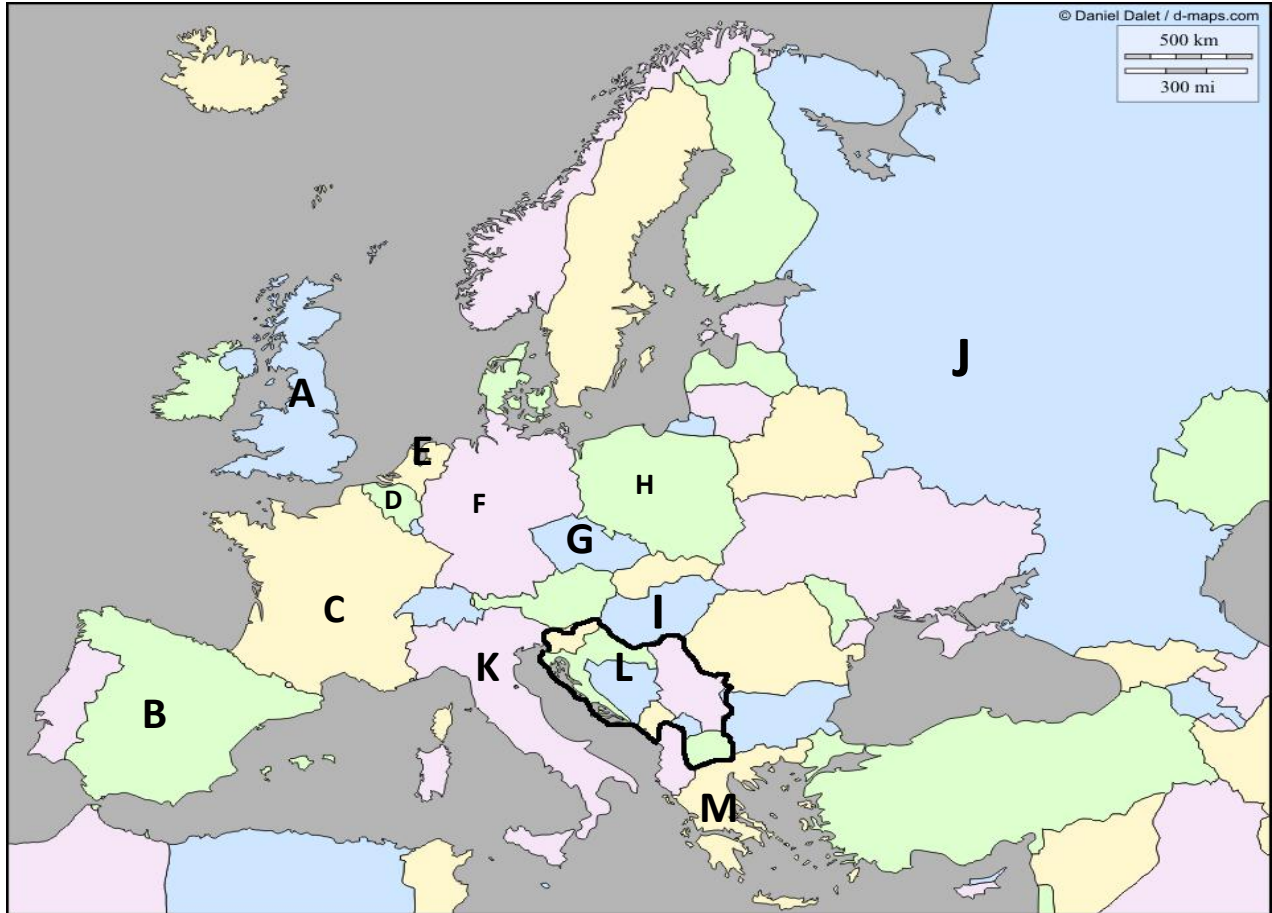
G. \_\_\_\_\_

H. \_\_\_\_\_

4. Countries of the Eastern and Western European Regions

**Objective:** Students will be able to identify and label a selection of countries found within each of the major regions of the world when provided a blank map of the world.

*Countries:* Identify each of the following: Belgium, Czech Republic, France, Germany, Greece, Hungary, Italy, Netherlands, Poland, Russia, Spain, United Kingdom, the Former Yugoslavia\*



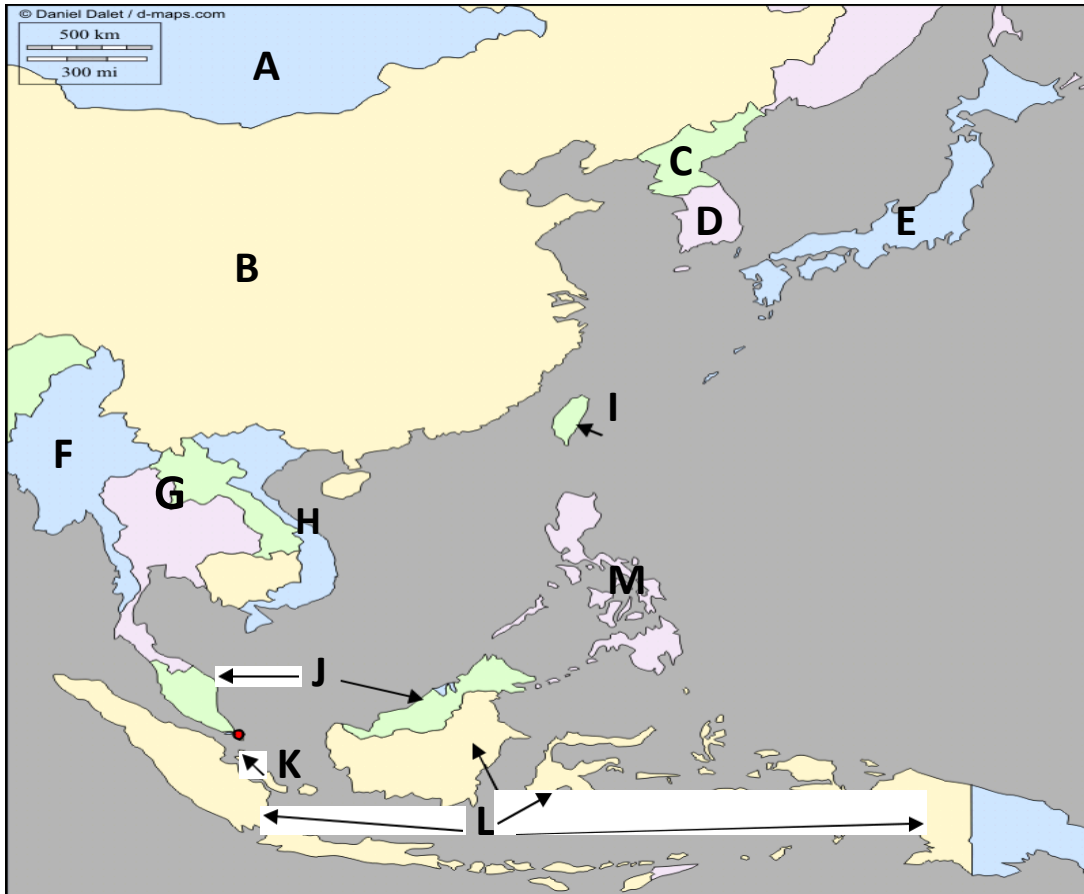
\*The Former Yugoslavia is today comprised of several countries: Bosnia-Herzegovina, Croatia, Kosovo (recognized by the United States and European Union), Macedonia, Montenegro, Serbia, and Slovenia.

- A. \_\_\_\_\_
- B. \_\_\_\_\_
- C. \_\_\_\_\_
- D. \_\_\_\_\_
- E. \_\_\_\_\_
- F. \_\_\_\_\_
- G. \_\_\_\_\_
- H. \_\_\_\_\_
- I. \_\_\_\_\_
- J. \_\_\_\_\_
- K. \_\_\_\_\_
- L. \_\_\_\_\_
- M. \_\_\_\_\_

5. Countries of the East Asian and Southeast Asian Regions

**Objective:** Students will be able to identify and label a selection of countries found within each of the major regions of the world when provided a blank map of the world.

*Countries:* Identify each of the following: China, Indonesia, Japan, Malaysia, Mongolia, Myanmar (Burma), North Korea, Philippines, Singapore, South Korea, Taiwan\*, Thailand, Vietnam



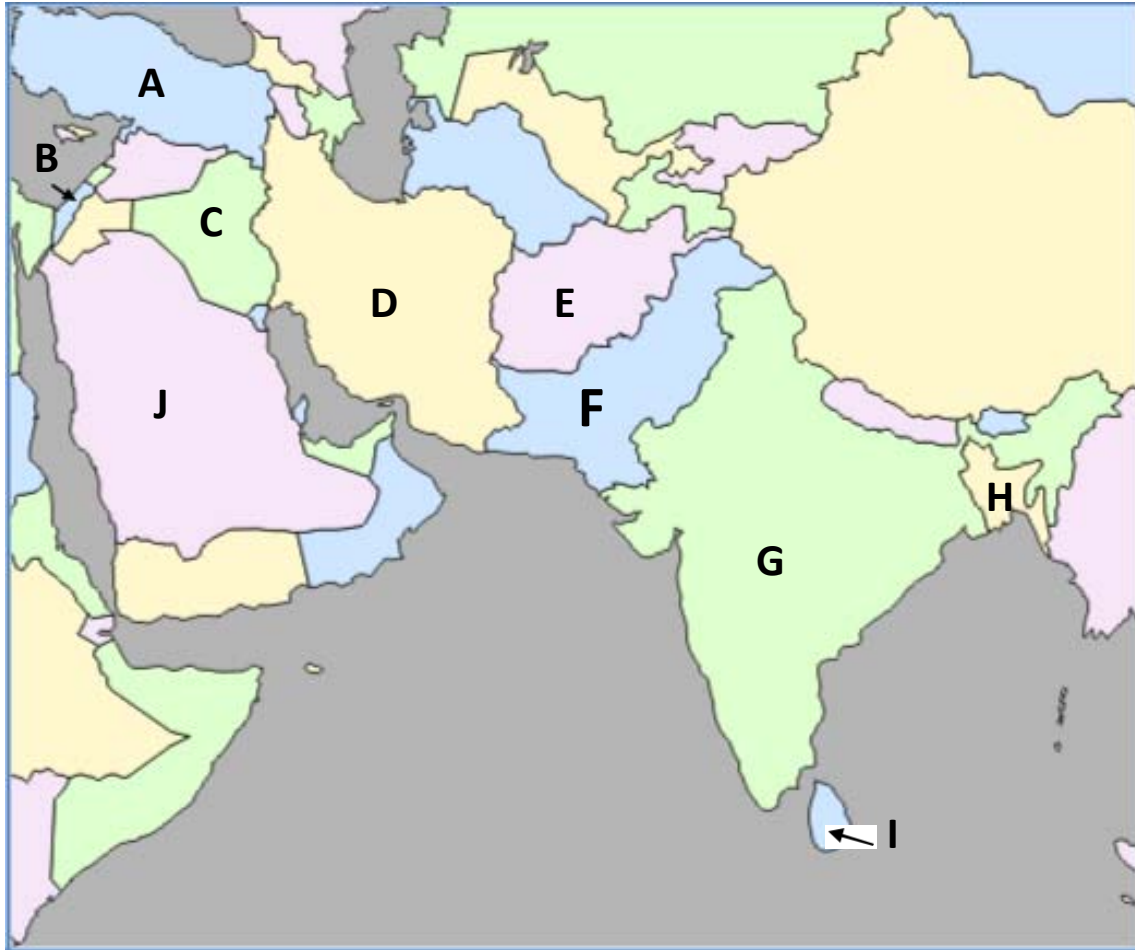
\*Taiwan is an independently governed territory claimed by China.

- A. \_\_\_\_\_
- B. \_\_\_\_\_
- C. \_\_\_\_\_
- D. \_\_\_\_\_
- E. \_\_\_\_\_
- F. \_\_\_\_\_
- G. \_\_\_\_\_
- H. \_\_\_\_\_
- I. \_\_\_\_\_
- J. \_\_\_\_\_
- K. \_\_\_\_\_
- L. \_\_\_\_\_
- M. \_\_\_\_\_

**6. Countries of the Middle East (or Southwest Asia) and South Asian Regions**

**Objective:** Students will be able to identify and label a selection of countries found within each of the major regions of the world when provided a blank map of the world.

**Countries:** Identify the following: Afghanistan, Bangladesh, India, Iran, Iraq, Israel, Pakistan, Saudi Arabia, Sri Lanka, Turkey



A. \_\_\_\_\_

B. \_\_\_\_\_

C. \_\_\_\_\_

D. \_\_\_\_\_

E. \_\_\_\_\_

F. \_\_\_\_\_

G. \_\_\_\_\_

H. \_\_\_\_\_

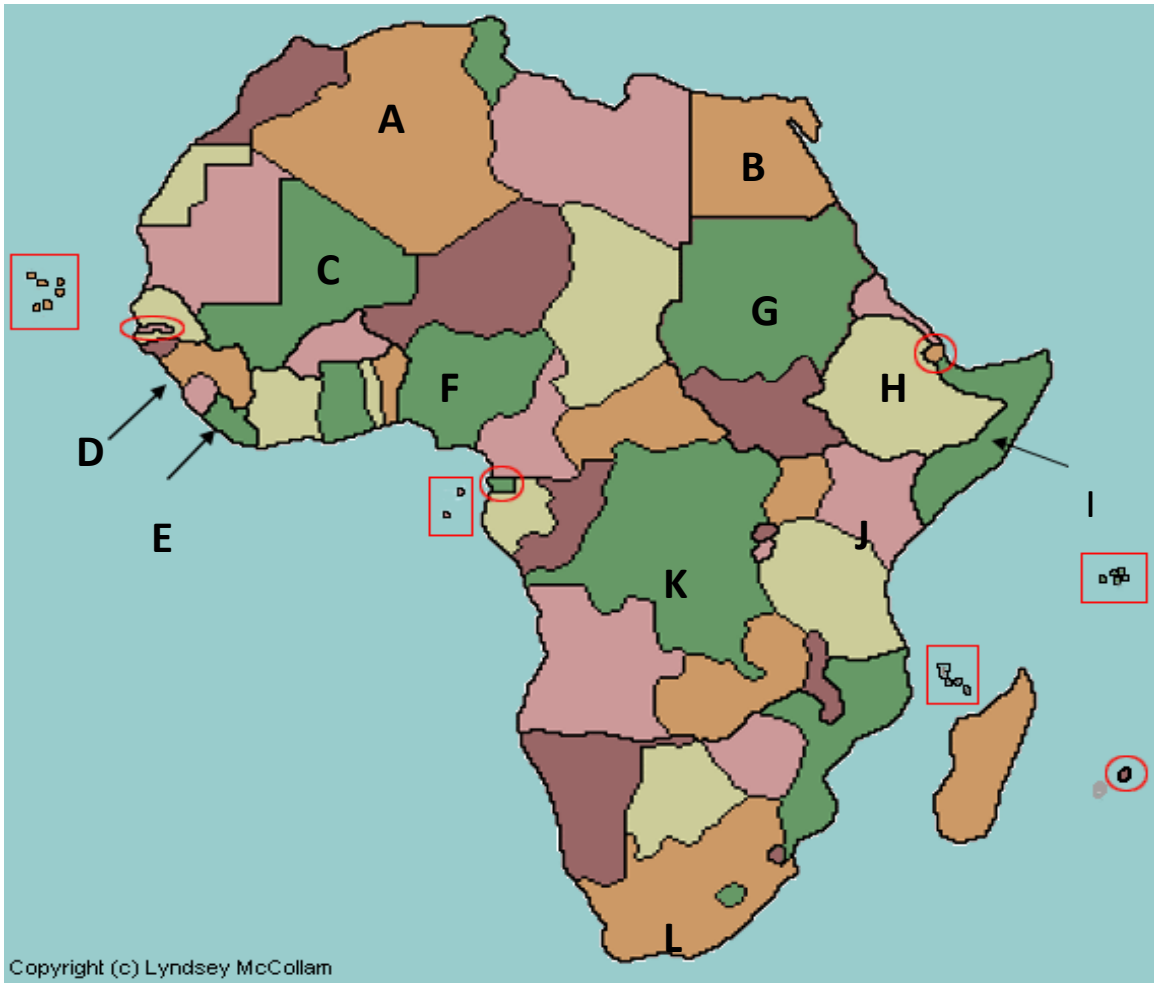
I. \_\_\_\_\_

J. \_\_\_\_\_

7. Countries of the North African and Sub-Saharan Regions

**Objective:** Students will be able to identify and label a selection of countries found within each of the major regions of the world when provided a blank map of the world.

*Countries:* Identify each of the following: Algeria, Democratic Republic of Congo, Egypt, Ethiopia, Kenya, Liberia, Mali, Nigeria, Sierra Leone, Somalia, South Africa, Sudan



- |          |          |          |
|----------|----------|----------|
| A. _____ | B. _____ | C. _____ |
| D. _____ | E. _____ | F. _____ |
| G. _____ | H. _____ | I. _____ |
| J. _____ | K. _____ | L. _____ |

**8. Countries of the South American Region**

**Objective:** Students will be able to identify and label a selection of countries found within each of the major regions of the world when provided a blank map of the world.

*Countries:* Identify each of the following: Argentina, Brazil, Chile, Colombia, Peru, Venezuela



A. \_\_\_\_\_

B. \_\_\_\_\_

C. \_\_\_\_\_

D. \_\_\_\_\_

E. \_\_\_\_\_

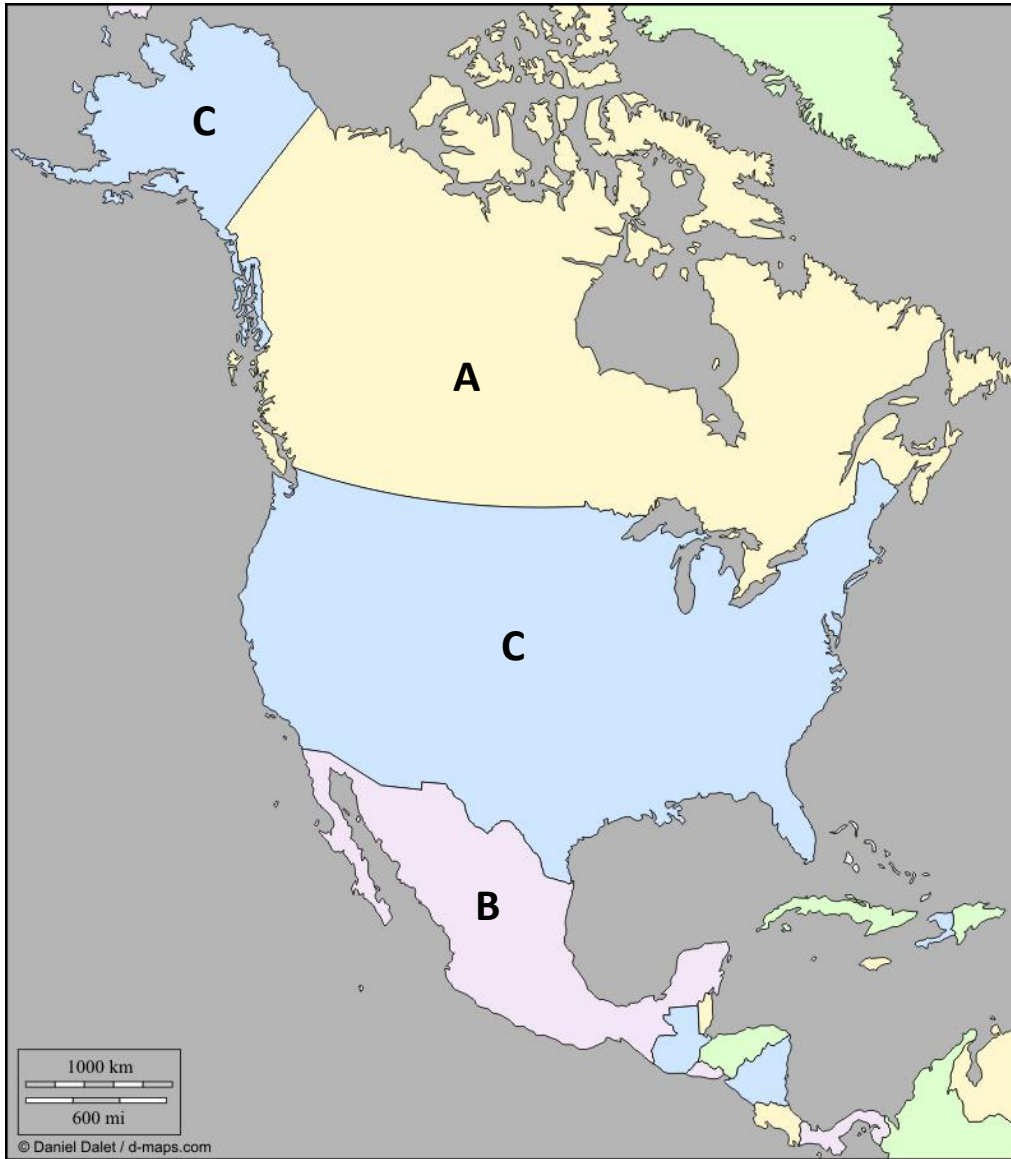
F. \_\_\_\_\_



9. Countries of the North American Region

**Objective:** Students will be able to identify and label a selection of countries found within each of the major regions of the world when provided a blank map of the world.

*Countries:* Identify each of the following: Canada, Mexico, United States



A. \_\_\_\_\_

B. \_\_\_\_\_

C. \_\_\_\_\_

10. States of the United States

**Objective:** Students will be able to identify and label a selection of states comprising the United States when provided a blank map of the United States.

*States:* Identify all of the 50 states.

